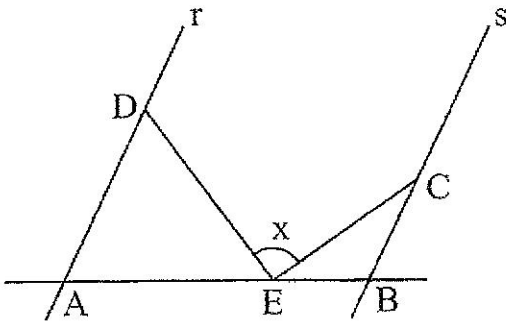
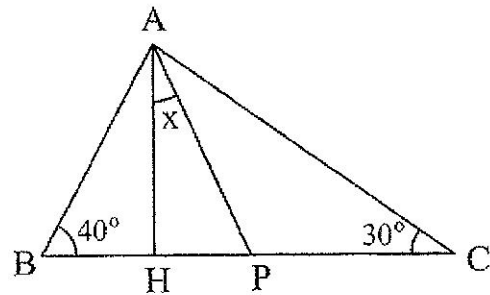


17) Na figura abaixo, $r \parallel s$, $AE = AD$ e $BE = BC$. Calcule a medida x do ângulo \widehat{CED} .

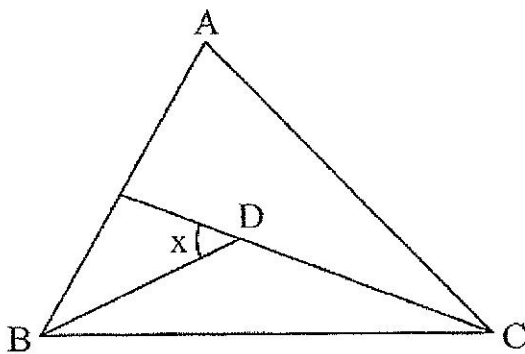


18) Calcule o valor de x na figura ao lado.

AH \rightarrow altura relativa a BC
 AP \rightarrow bissetriz interna de \widehat{A}



19) Calcule o valor de x na figura abaixo.



$\widehat{A} = 80^\circ$

BD e CD \rightarrow bissetrizes de \widehat{B} e \widehat{C} , respectivamente